

Counting Up in Tenths


The rectangle has been divided into ten equal parts. These are fractions of the whole and they are called tenths.

Task: Write the number word and the fraction in the table below. The first one has been done for you.



one tenth


$\frac{1}{10}$



--	--



--	--



--	--



--	--




--	--



--	--



--	--



--	--

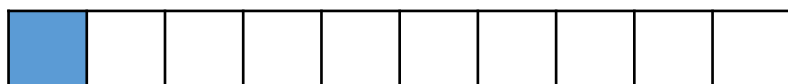


--	--

Can you count up in tenths? Practice counting up in tenths.


Counting Up in Tenths

Task: Complete the table below, colouring in the correct number of tenths and writing the words and fraction numbers in the boxes.

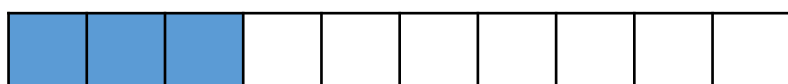
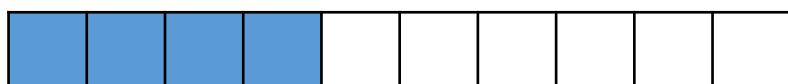
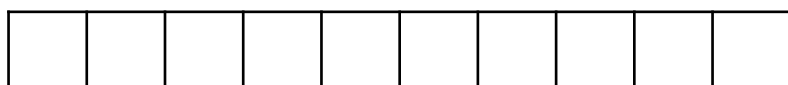


one tenth

$\frac{1}{10}$



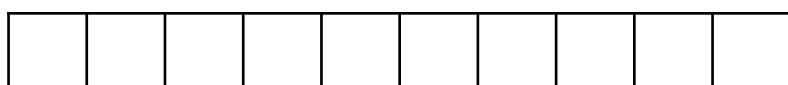
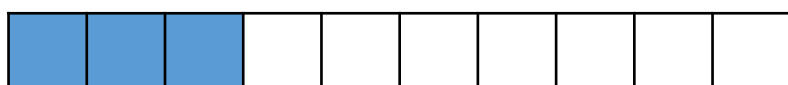
two tenths



$\frac{6}{10}$



seven tenths



$\frac{10}{10} = 1$